


**1. Sofia has a twenty dollar bill. She buys five squirt guns for \$3 each.**

**How much money does**


**Sofia have left?**



**2. Jade invited six friends over for a water balloon fight.**

**She gave each friend three balloons and kept two for herself.**


**How many balloons do they have altogether?**



**3. Julien has swimming lessons three times a week for 30 minutes.**

**Cayden has lessons twice a week for 30 minutes. How many more minutes does**

**Julien have lessons than Cayden?**




**4. Megan can make picnic blankets. She can make 7**


**blankets with 21 yards of material. How many yards of material would she need to make 10 blankets?**




**5. Amina is selling lemonade. She sells 26 cups on Friday, 15 cups on Saturday, and 35 cups on Sunday. How many more cups did she sell on Friday and Saturday than on Sunday?**




**6. Cesar wants to buy his mom a present that costs \$15.25. He wants to buy his sister a present that costs \$22.47. He has saved \$18.50. How much more does he need to save to be able to buy both presents?**




**7. Teyana made 1 dozen chocolate chip cookies, 2 dozen oatmeal cookies, and 2 dozen sugar cookies. She gave away 45 cookies to her friends. How many cookies does she have left?**




**8. Lincoln is painting rocks for his garden. He needs to paint 500 rocks total. The first hour he paints 58, the second hour he paints 105, and the third hour he paints 190. How many more rocks does he need to paint to finish his project?**




9. Caleb wants to rent a boat. The boat costs \$50 an hour. He wants to rent the boat for two and a half hours. He has saved up \$100. How much more money does he need to save to be able to rent the boat?




10. Amir wants to read 1,000 pages over spring break. He reads a book that has 250 pages, a book that has 102 pages, and a book that has 98 pages. How many more pages does he need to read to reach his goal?



11. Zara wants to raise bees. She buys 20 bees the first month, 35 the second month, and 41 the third month. If she splits the bees between three beehives, how many bees are inside each hive?



12. Mrs. Hansen's class is going to plant flowers around her school as a service project. They have 6 plots to plant flowers in. They have 24 daisies, 36 petunias, and 60 chrysanthemums. How many flowers do they plant inside each plot?



# Answer Sheet

Name: \_\_\_\_\_

Use this answer sheet to record your answers to the task cards.

|     |     |     |
|-----|-----|-----|
| 1.  | 2.  | 3.  |
| 4.  | 5.  | 6.  |
| 7.  | 8.  | 9.  |
| 10. | 11. | 12. |

