


Tuesday Math Page

Extra Facts (Source: mathlearningcenter.org)

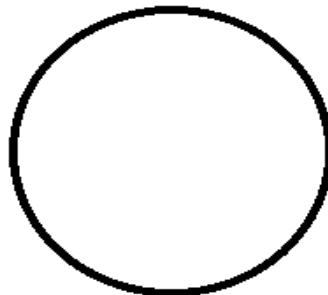
Sometimes story problems give you more facts than you need to solve the problem. In each problem below, cross out the fact you don't need. Then solve the problem. Show your work.

1. Nick has 3 cats. He had 12 fish. He gave 4 of the fish to his friend. How many fish does he have left?
2. Lin's big sister is 15. She listened to 8 songs on her music player in the morning. She listened to 9 more songs that night. How many songs did she listen to in all?
3. Amber made 9 cupcakes. Then she made 12 more cupcakes. It took 2 cups of sugar to make the frosting. How many cupcakes did she make in all?
4. The Green Dragon had 250 gold pieces. He is 18 feet tall. He is mad because the trolls took 60 of his gold pieces. How many gold pieces does he have left?

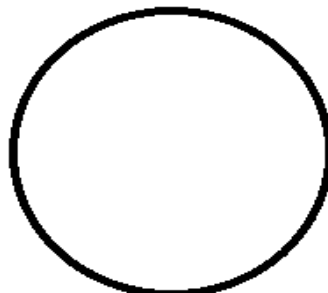


Shape Partitions (Source: <https://www.openmiddle.com/>)

5. Draw in segments to show how to cut each shape into fourths.



6. Try again with different cut patterns than what you did above.



7. Pyramid Puzzle #3 (Source: mathforlove.org)

Each number in the Pyramid is the sum of the two numbers below it. Fill in the missing numbers in the Pyramid. Numbers may repeat.

