







Popsicle Tallies (Source: mathlearningcenter.org)

A first grade class voted on their favorite Popsicle flavors. They used tally marks to show many votes each flavor got.

Flavor		Votes
Cherry		
Orange		
Grape		

1. How many votes did Cherry get? _____
2. How many votes did Orange get? _____
3. How many votes did Grape get? _____
4. How many votes were there in all? _____
5. Draw a circle around the name of the flavor that got the most votes.

Cherry

Orange

Grape

6. Draw a line under the name of the flavor that got the least votes.

Cherry

Orange

Grape

Create an Equation

Use only the digits 1 to 7, at most one time each, fill in the boxes to create a true equation. (Source: <https://www.openmiddle.com/>)

$$\boxed{} \boxed{} = \boxed{} \boxed{} + \boxed{} \boxed{}$$

Making Zero (Source: <https://playwithyourmath.com/>)

Place a $+$ or $-$ in each \square to make 0.

$$0 = 1 \square 2 \square 3 \square 4$$

How about?

$$0 = 1 \square 2 \square 3 \square 4 \square 5$$