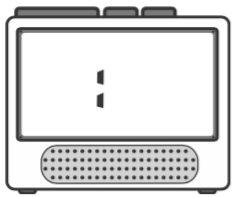


Friday Math Page

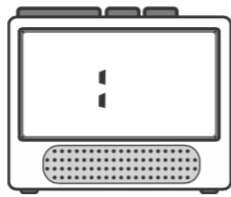
1. Clocks (Source: mathlearningcenter.org)

Read each of these clock faces and write the time on the digital clock.

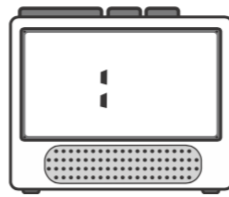
a



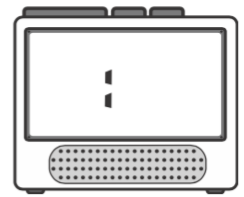
b



c



d



2. Puzzle (Source: <https://www.solvemoji.com/>)

What is the value of the last row?

$$\text{Cactus} + \text{Cactus} = 16$$

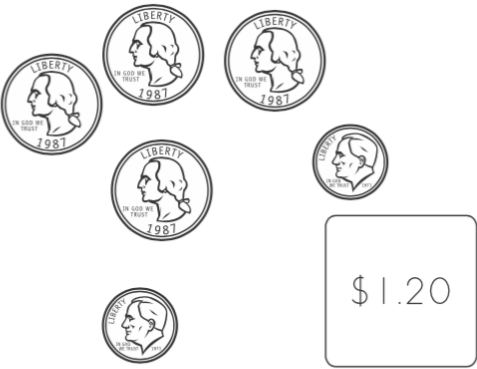



$$\text{Cactus} + \text{Maple Leaf} = 9$$

$$\text{Clover} - \text{Maple Leaf} = 2$$

$$\text{Cactus} - \text{Clover} = ?$$

3. Count the Money (Source: mathlearningcenter.org)

Mr. Mole needs help! He is still a little mixed up about how to use the dollar sign, the cent sign, and the decimal point. Count the money in each box and write the amount correctly.

<p>ex</p>  <p>\$1.20</p>	<p>a Thursday</p>  <p>¢</p>
<p>b Friday</p>  <p>\$ ____ . ____</p>	<p>c Saturday</p>  <p></p>