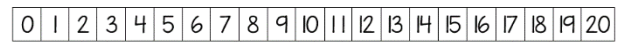
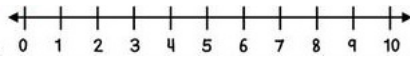
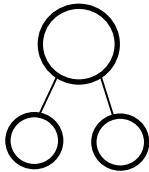
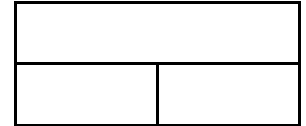
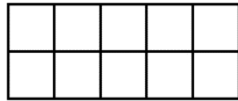


Name _____

Date _____

Concrete Addition & Subtraction Baseline



$$\underline{\hspace{2cm}} = 1 + 8$$

$$7 - 3 = \underline{\hspace{2cm}}$$

$$6 + 4 = \underline{\hspace{2cm}}$$

$$\underline{\hspace{2cm}} = 9 - 5$$

$$\underline{\hspace{2cm}} = 8 + 2$$

$$10 - 7 = \underline{\hspace{2cm}}$$

$$\underline{\hspace{2cm}} = 6 + 8$$


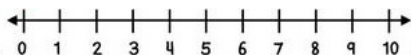
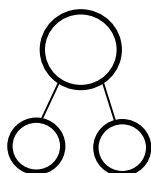

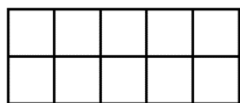

$$16 - 9 = \underline{\hspace{2cm}}$$

Circle the picture of the tools you used to help you!

Name _____

Date _____

Concrete Addition & Subtraction Progress Monitoring I



$$\underline{\hspace{2cm}} = 2 + 6$$

$$5 - 3 = \underline{\hspace{2cm}}$$

$$3 + 6 = \underline{\hspace{2cm}}$$

$$\underline{\hspace{2cm}} = 8 - 5$$

$$\underline{\hspace{2cm}} = 4 + 5$$

$$10 - 6 = \underline{\hspace{2cm}}$$

$$\underline{\hspace{2cm}} = 5 + 2$$


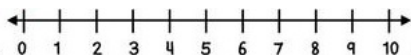
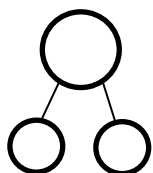

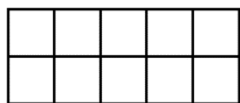

$$11 - 4 = \underline{\hspace{2cm}}$$

Circle the picture of the tools you used to help you!

Name _____

Date _____

Concrete Addition & Subtraction Progress Monitoring 2



$\underline{\hspace{2cm}} = 4 + 1$	$9 - 2 = \underline{\hspace{2cm}}$
$2 + 5 = \underline{\hspace{2cm}}$	$\underline{\hspace{2cm}} = 8 - 2$
$\underline{\hspace{2cm}} = 4 + 3$	$7 - 5 = \underline{\hspace{2cm}}$
$\underline{\hspace{2cm}} = 7 + 1$	$15 - 8 = \underline{\hspace{2cm}}$


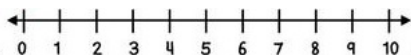
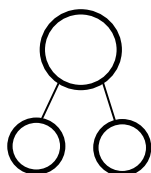

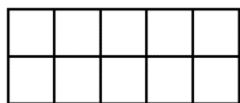

Circle the picture of the tools you used to help you!

Name _____

Date _____

Concrete Addition & Subtraction

Progress Monitoring 3



$\underline{\hspace{2cm}} = 6 + 1$	$6 - 3 = \underline{\hspace{2cm}}$
$5 + 4 = \underline{\hspace{2cm}}$	$\underline{\hspace{2cm}} = 8 - 1$
$\underline{\hspace{2cm}} = 7 + 2$	$10 - 4 = \underline{\hspace{2cm}}$
$\underline{\hspace{2cm}} = 5 + 3$	$12 - 6 = \underline{\hspace{2cm}}$

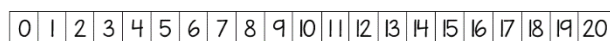
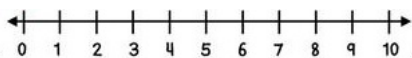
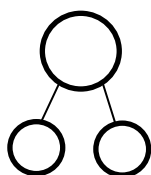

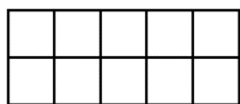

Circle the picture of the tools you used to help you!

Name _____

Date _____

Concrete Addition & Subtraction

Progress Monitoring 4



$$\underline{\hspace{2cm}} = 5 + 2$$

$$9 - 8 = \underline{\hspace{2cm}}$$

$$4 + 6 = \underline{\hspace{2cm}}$$

$$\underline{\hspace{2cm}} = 7 - 4$$

$$\underline{\hspace{2cm}} = 6 + 3$$

$$8 - 2 = \underline{\hspace{2cm}}$$

$$\underline{\hspace{2cm}} = 4 + 1$$

$$12 - 9 = \underline{\hspace{2cm}}$$

Circle the picture of the tools you used to help you!