

Name: _____

I.OA.7 Set 3

Answer Sheet

Circle your answer. Use the extra space to show your work.

1. True False	2. True False	3. True False	4. True False
5. True False	6. True False	7. True False	8. True False
9. True False	10. True False	11. True False	12. True False
13. True False	14. True False	15. True False	16. True False
17. True False	18. True False	19. True False	20. True False
21. True False	22. True False	23. True False	24. True False
25. True False	26. True False	27. True False	28. True False
29. True False	30. True False	31. True False	32. True False

Name: _____

I.OA.7 Set 3

Answer Sheet

Circle your answer. Use the extra space to show your work.

1. <input checked="" type="radio"/> True <input type="radio"/> False	2. <input checked="" type="radio"/> True <input type="radio"/> False	3. True <input checked="" type="radio"/> False	4. True <input checked="" type="radio"/> False
5. <input checked="" type="radio"/> True <input type="radio"/> False	6. True <input checked="" type="radio"/> False	7. <input checked="" type="radio"/> True <input type="radio"/> False	8. True <input checked="" type="radio"/> False
9. <input checked="" type="radio"/> True <input type="radio"/> False	10. True <input checked="" type="radio"/> False	11. <input checked="" type="radio"/> True <input type="radio"/> False	12. True <input checked="" type="radio"/> False
13. <input checked="" type="radio"/> True <input type="radio"/> False	14. True <input checked="" type="radio"/> False	15. True <input checked="" type="radio"/> False	16. <input checked="" type="radio"/> True <input type="radio"/> False
17. True <input checked="" type="radio"/> False	18. <input checked="" type="radio"/> True <input type="radio"/> False	19. <input checked="" type="radio"/> True <input type="radio"/> False	20. True <input checked="" type="radio"/> False
21. <input checked="" type="radio"/> True <input type="radio"/> False	22. <input checked="" type="radio"/> True <input type="radio"/> False	23. <input checked="" type="radio"/> True <input type="radio"/> False	24. True <input checked="" type="radio"/> False
25. <input checked="" type="radio"/> True <input type="radio"/> False	26. <input checked="" type="radio"/> True <input type="radio"/> False	27. True <input checked="" type="radio"/> False	28. True <input checked="" type="radio"/> False
29. True <input checked="" type="radio"/> False	30. True <input checked="" type="radio"/> False	31. True <input checked="" type="radio"/> False	32. <input checked="" type="radio"/> True <input type="radio"/> False

True and False Equations

Set 3

Addition Equations
1.OA.7

© 2017 Jordan Piacenti

True and False Equations Set 3

1. Is this equation true or false?

$$10 - 6 = 2 + 2$$




© 2017 Jordan Piacenti

True and False Equations Set 3

2. Is this equation true or false?

$$5 + 5 = 12 - 2$$



© 2017 Jordan Piacenti

True and False Equations Set 3

3. Is this equation true or false?

$$18 - 6 = 10 + 1$$



© 2017 Jordan Piacenti

4. Is this equation true or false?


$$13 - 6 = 4 + 1$$



© 2017 Jordan Piacenti

5. Is this equation true or false?

$$7 - 5 = 2 + 0$$



© 2017 Jordan Piacenti

6. Is this equation true or false?


$$4 + 5 = 9 - 2$$



© 2017 Jordan Piacenti

7. Is this equation true or false?

$$20 - 10 = 5 + 5$$




© 2017 Jordan Piacenti

True and False Equations Set 3

8. Is this equation true or false?

$$9-6=4-2$$




© 2017 Jordan Piacenti

True and False Equations Set 3

9. Is this equation true or false?

$$10+1=12-1$$



© 2017 Jordan Piacenti

True and False Equations Set 3

10. Is this equation true or false?

$$15-4=10+2$$




© 2017 Jordan Piacenti

True and False Equations Set 3

11. Is this equation true or false?

$$19-3=8+8$$



© 2017 Jordan Piacenti

12. Is this equation true or false?

$$12+3=18-2$$



© 2017 Jordan Piacenti

13. Is this equation true or false?


$$20-0=10+10$$



© 2017 Jordan Piacenti

14. Is this equation true or false?

$$8-1=3+3$$



© 2017 Jordan Piacenti

15. Is this equation true or false?

$$10-2=5+4$$



© 2017 Jordan Piacenti

16. Is this equation true or false?

$$9 + 1 = 11 - 1$$



© 2017 Jordan Piacenti

17. Is this equation true or false?

$$16 - 4 = 6 + 7$$



© 2017 Jordan Piacenti

18. Is this equation true or false?

$$8 - 1 = 5 + 2$$



© 2017 Jordan Piacenti

19. Is this equation true or false?

$$15 - 5 = 8 + 2$$



© 2017 Jordan Piacenti

20. Is this equation true or false?

$$16 - 2 = 7 + 5$$



© 2017 Jordan Piacenti

21. Is this equation true or false?


$$10 + 1 = 12 - 1$$



© 2017 Jordan Piacenti

22. Is this equation true or false?


$$19 - 2 = 10 + 7$$



© 2017 Jordan Piacenti

23. Is this equation true or false?

$$13 - 6 = 3 + 4$$



© 2017 Jordan Piacenti

24. Is this equation true or false?

$$3-1=2+2$$



© 2017 Jordan Piacenti

25. Is this equation true or false?

$$1+1=4-2$$



© 2017 Jordan Piacenti

26. Is this equation true or false?

$$7+7=18-4$$



© 2017 Jordan Piacenti

27. Is this equation true or false?

$$9+1=12-1$$



© 2017 Jordan Piacenti

28. Is this equation true or false?

$$11 + 4 = 16 - 2$$



© 2017 Jordan Piacenti

29. Is this equation true or false?

$$4 + 1 = 6 - 3$$



© 2017 Jordan Piacenti

30. Is this equation true or false?


$$3 + 3 = 8 - 5$$



© 2017 Jordan Piacenti

31. Is this equation true or false?


$$10 - 5 = 7 - 3$$



© 2017 Jordan Piacenti

32. Is this equation true or false?

$$17 - 7 = 2 + 8$$



© 2017 Jordan Piacenti