

Name: _____

I.OA.7 Set I

Answer Sheet

Circle your answer. Use the extra space to show your work.

1. True False	2. True False	3. True False	4. True False
5. True False	6. True False	7. True False	8. True False
9. True False	10. True False	11. True False	12. True False
13. True False	14. True False	15. True False	16. True False
17. True False	18. True False	19. True False	20. True False
21. True False	22. True False	23. True False	24. True False
25. True False	26. True False	27. True False	28. True False
29. True False	30. True False	31. True False	32. True False

Name: _____

I.OA.7 Set I

Answer Sheet

Circle your answer. Use the extra space to show your work.

1. <input checked="" type="radio"/> True <input type="radio"/> False	2. <input checked="" type="radio"/> True <input type="radio"/> False	3. <input type="radio"/> True <input checked="" type="radio"/> False	4. <input checked="" type="radio"/> True <input type="radio"/> False
5. <input checked="" type="radio"/> True <input type="radio"/> False	6. <input checked="" type="radio"/> True <input type="radio"/> False	7. <input checked="" type="radio"/> True <input type="radio"/> False	8. <input type="radio"/> True <input checked="" type="radio"/> False
9. <input checked="" type="radio"/> True <input type="radio"/> False	10. <input checked="" type="radio"/> True <input type="radio"/> False	11. <input checked="" type="radio"/> True <input type="radio"/> False	12. <input type="radio"/> True <input checked="" type="radio"/> False
13. <input type="radio"/> True <input checked="" type="radio"/> False	14. <input type="radio"/> True <input checked="" type="radio"/> False	15. <input checked="" type="radio"/> True <input type="radio"/> False	16. <input checked="" type="radio"/> True <input type="radio"/> False
17. <input type="radio"/> True <input checked="" type="radio"/> False	18. <input type="radio"/> True <input checked="" type="radio"/> False	19. <input type="radio"/> True <input checked="" type="radio"/> False	20. <input type="radio"/> True <input checked="" type="radio"/> False
21. <input type="radio"/> True <input checked="" type="radio"/> False	22. <input type="radio"/> True <input checked="" type="radio"/> False	23. <input checked="" type="radio"/> True <input type="radio"/> False	24. <input type="radio"/> True <input checked="" type="radio"/> False
25. <input type="radio"/> True <input checked="" type="radio"/> False	26. <input type="radio"/> True <input checked="" type="radio"/> False	27. <input checked="" type="radio"/> True <input type="radio"/> False	28. <input type="radio"/> True <input checked="" type="radio"/> False
29. <input type="radio"/> True <input checked="" type="radio"/> False	30. <input type="radio"/> True <input checked="" type="radio"/> False	31. <input checked="" type="radio"/> True <input type="radio"/> False	32. <input checked="" type="radio"/> True <input type="radio"/> False

True and False Equations

Set 1

Addition Equations
1.OA.7

© 2017 Jordan Piacenti

True and False Equations Set 1

1. Is this equation true or false?

$$12 = 2 + 10$$




© 2017 Jordan Piacenti

True and False Equations Set 1

2. Is this equation true or false?

$$1 + 5 = 3 + 3$$



© 2017 Jordan Piacenti

True and False Equations Set 1

3. Is this equation true or false?

$$2 + 2 = 5 + 1$$



© 2017 Jordan Piacenti

True and False Equations Set 1

4. Is this equation true or false?

$$1+5=5+1$$




© 2017 Jordan Piacenti

True and False Equations Set 1

5. Is this equation true or false?

$$4+5=3+6$$



© 2017 Jordan Piacenti

True and False Equations Set 1

6. Is this equation true or false?

$$10+2=8+4$$




© 2017 Jordan Piacenti

True and False Equations Set 1

7. Is this equation true or false?

$$2+8=3+7$$




© 2017 Jordan Piacenti

True and False Equations Set 1

8. Is this equation true or false?

$$6+7=10+1$$




© 2017 Jordan Piacenti

True and False Equations Set 1

9. Is this equation true or false?

$$1+1=2+0$$



© 2017 Jordan Piacenti

True and False Equations Set 1

10. Is this equation true or false?

$$3+4=5+2$$




© 2017 Jordan Piacenti

True and False Equations Set 1

11. Is this equation true or false?

$$2+4=5+1$$



© 2017 Jordan Piacenti

True and False Equations Set 1

12. Is this equation true or false?

$$10+10=13+5$$



© 2017 Jordan Piacenti

True and False Equations Set 1

13. Is this equation true or false?

$$7+7=10+2$$




© 2017 Jordan Piacenti

True and False Equations Set 1

14. Is this equation true or false?

$$4+4=3+7$$



© 2017 Jordan Piacenti

True and False Equations Set 1

15. Is this equation true or false?

$$2+6=0+8$$



© 2017 Jordan Piacenti

True and False Equations Set 1

16. Is this equation true or false?

$$9+9=10+8$$




© 2017 Jordan Piacenti

True and False Equations Set 1

17. Is this equation true or false?

$$2+3=4+0$$



© 2017 Jordan Piacenti

True and False Equations Set 1

18. Is this equation true or false?

$$8+0=7+2$$




© 2017 Jordan Piacenti

True and False Equations Set 1

19. Is this equation true or false?

$$3+5=6+1$$



© 2017 Jordan Piacenti

True and False Equations Set 1

20. Is this equation true or false?

$$1+10=6+6$$



© 2017 Jordan Piacenti

True and False Equations Set 1

21. Is this equation true or false?

$$10+2=11+0$$




© 2017 Jordan Piacenti

True and False Equations Set 1

22. Is this equation true or false?

$$1+5=4+1$$




© 2017 Jordan Piacenti

True and False Equations Set 1

23. Is this equation true or false?

$$15+2=7+10$$



© 2017 Jordan Piacenti

True and False Equations Set 1

24. Is this equation true or false?

$$7+9=8+7$$



© 2017 Jordan Piacenti

True and False Equations Set 1

25. Is this equation true or false?

$$5+6=2+8$$



© 2017 Jordan Piacenti

True and False Equations Set 1

26. Is this equation true or false?

$$4+6=9+2$$



© 2017 Jordan Piacenti

True and False Equations Set 1

27. Is this equation true or false?

$$13+3=6+10$$



© 2017 Jordan Piacenti

True and False Equations Set 1

28. Is this equation true or false?

$$7+9=8+7$$



© 2017 Jordan Piacenti

True and False Equations Set 1

29. Is this equation true or false?

$$5+6=2+8$$



© 2017 Jordan Piacenti

True and False Equations Set 1

30. Is this equation true or false?

$$4+6=9+2$$




© 2017 Jordan Piacenti

True and False Equations Set 1

31. Is this equation true or false?


$$10+4=5+9$$



© 2017 Jordan Piacenti

32. Is this equation true or false?

$$14 + 2 = 10 + 6$$



© 2017 Jordan Piacenti