


Center 24

Number Bonds to 10

Complete the number bond. Write an equation to match, and record it on the recording sheet.



Recording Sheet

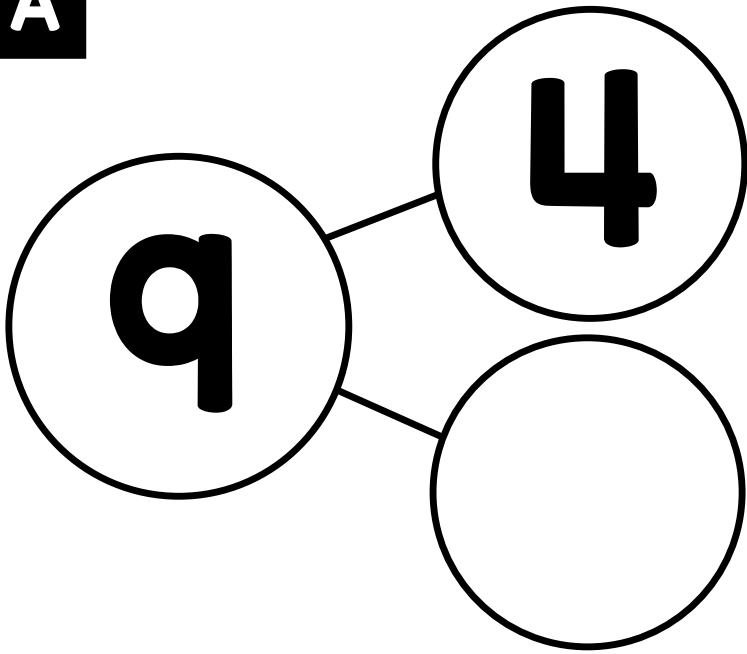
Name: _____

Number Bonds to 10

Directions: Subtract the part from the whole to find the missing number. Write a number sentence for each number bond.

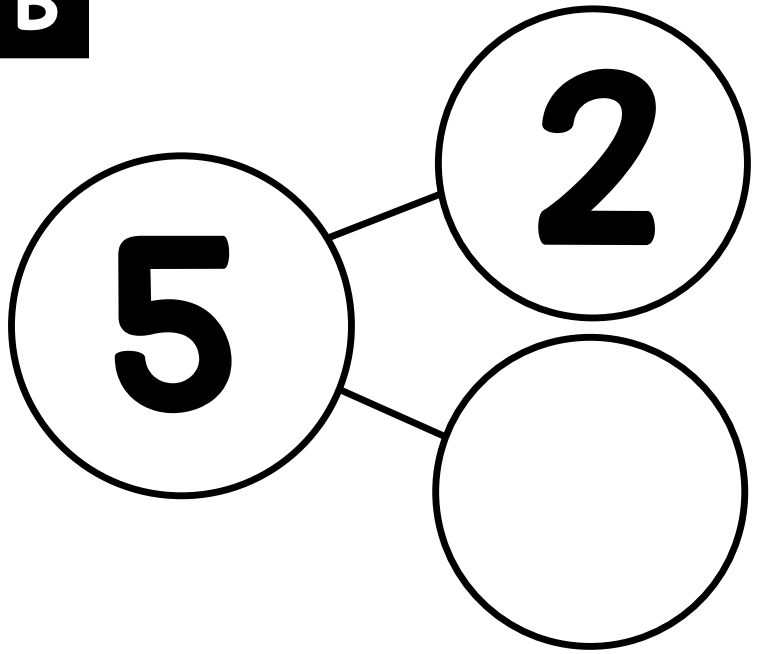
A	$9 - 4 = 5$	B	_____ - _____ = _____
C	_____ - _____ = _____	D	_____ - _____ = _____
E	_____ - _____ = _____	F	_____ - _____ = _____
G	_____ - _____ = _____	H	_____ - _____ = _____
I	_____ - _____ = _____	J	_____ - _____ = _____
K	_____ - _____ = _____	L	_____ - _____ = _____
M	_____ - _____ = _____	N	_____ - _____ = _____
O	_____ - _____ = _____	P	_____ - _____ = _____

©2013 by Linda Ward Beech, Scholastic Teaching Resources

A

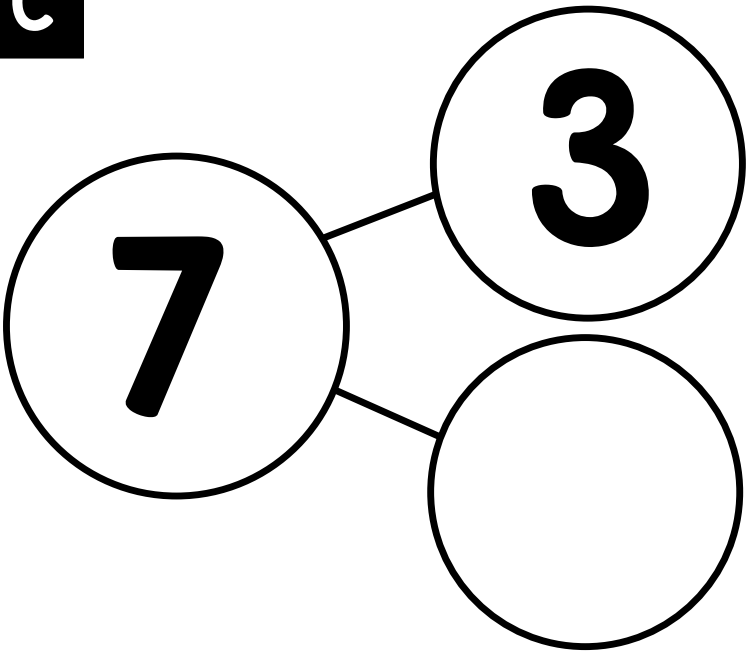
$$\square - \square = \square$$

Center 24 Unit 3

B

$$\square - \square = \square$$

Center 24 Unit 3

C

$$\square - \square = \square$$

Center 24 Unit 3

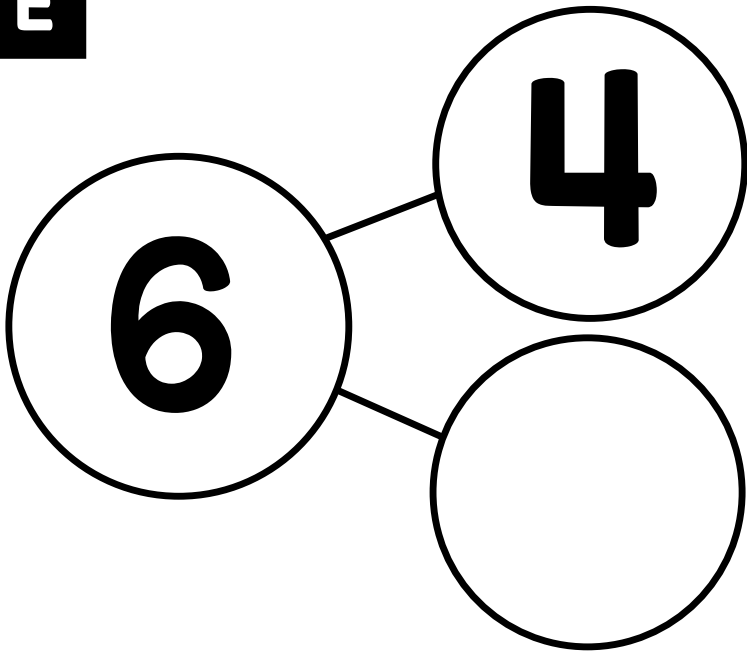
D

$$\square - \square = \square$$

Center 24 Unit 3

© Annie Moffatt @ The Moffatt Girls 2018

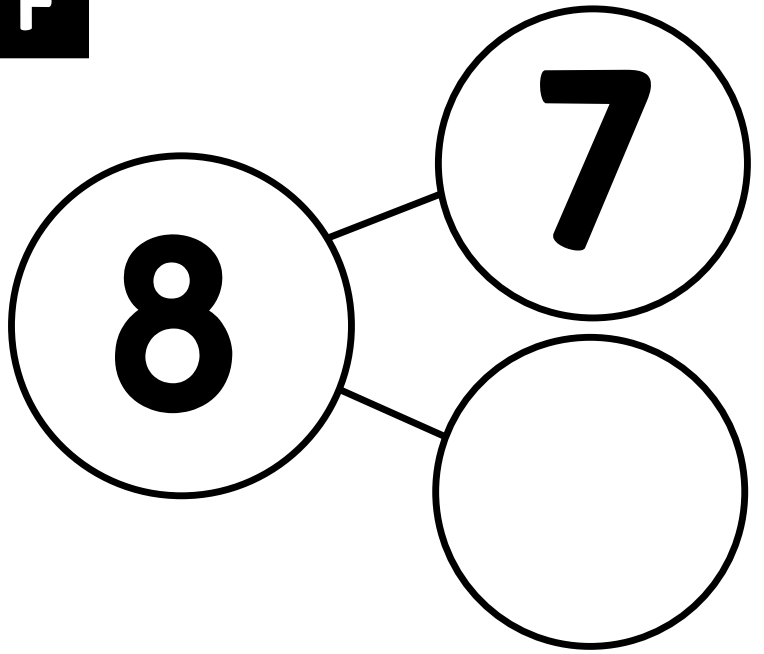
E



$$\square - \square = \square$$

Center 24 Unit 3

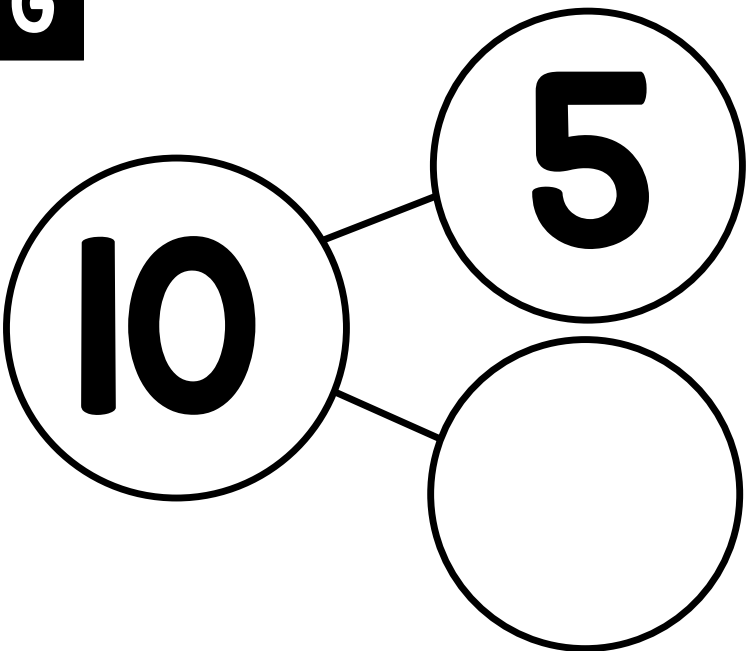
F



$$\square - \square = \square$$

Center 24 Unit 3

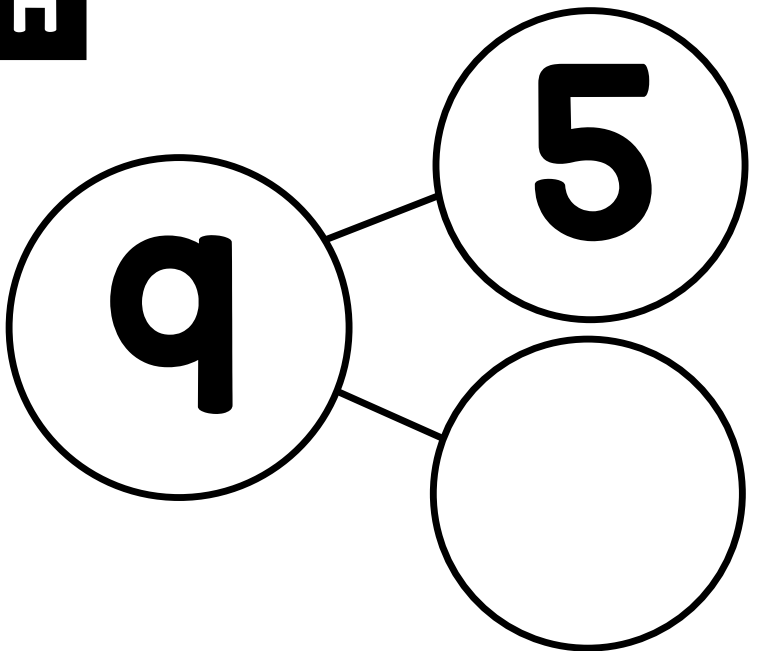
G



$$\square - \square = \square$$

Center 24 Unit 3

H

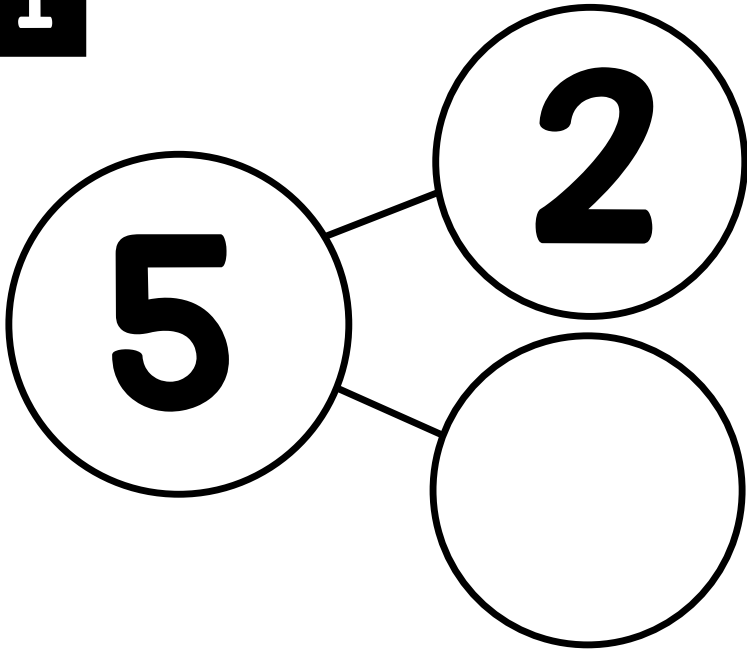


$$\square - \square = \square$$

Center 24 Unit 3

© Annie Moffatt @ The Moffatt Girls 2018

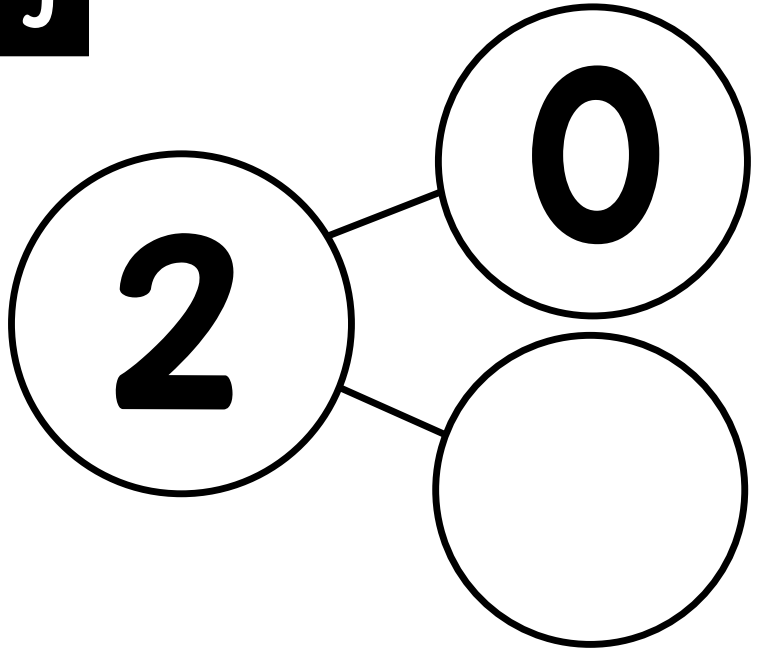
I



$$\square - \square = \square$$

Center 24 Unit 3

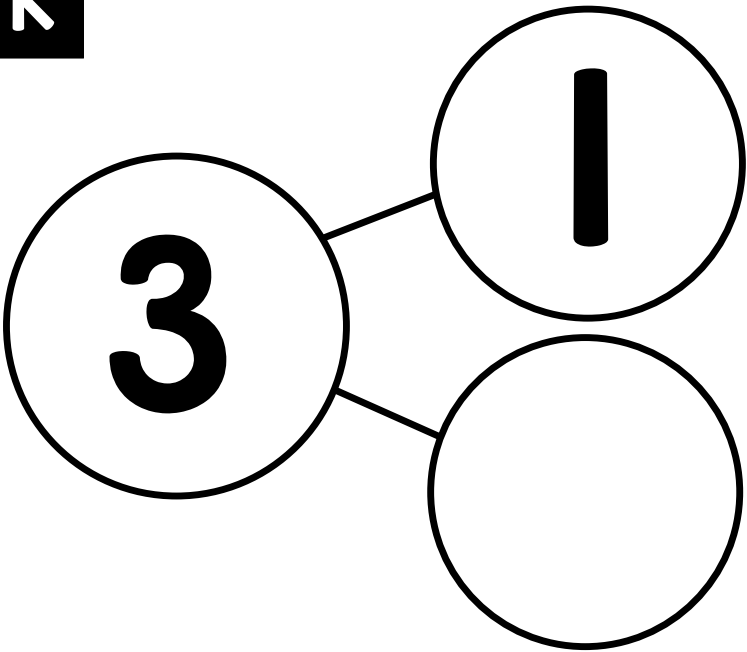
J



$$\square - \square = \square$$

Center 24 Unit 3

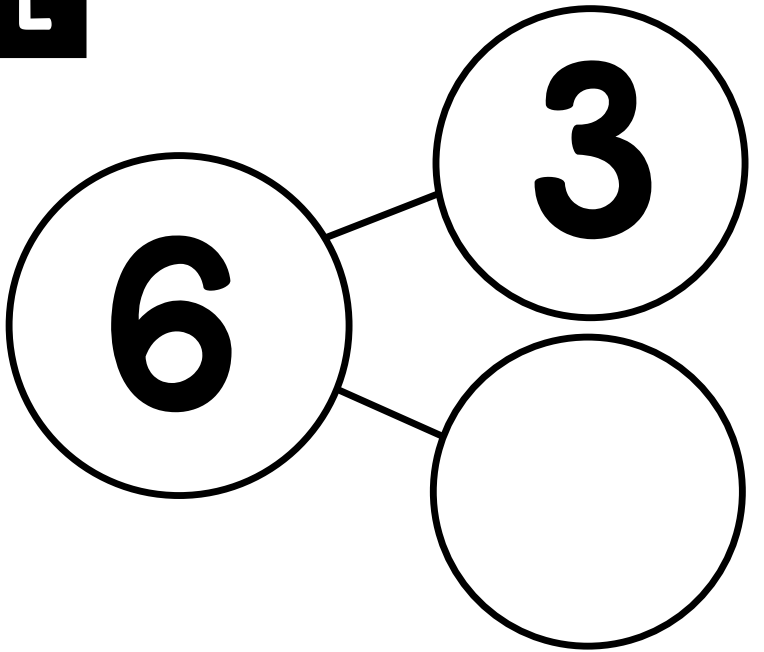
K



$$\square - \square = \square$$

Center 24 Unit 3

L

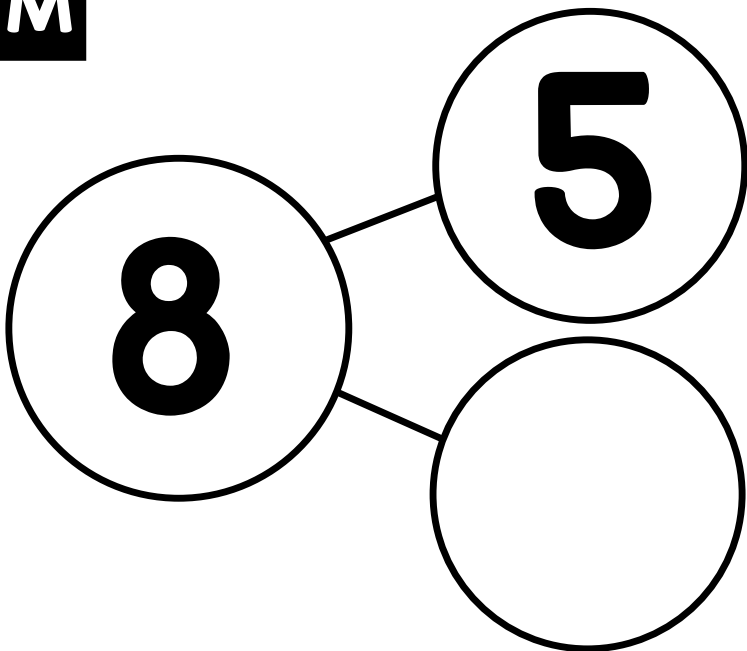


$$\square - \square = \square$$

Center 24 Unit 3

© Annie Moffatt @ The Moffatt Girls 2018

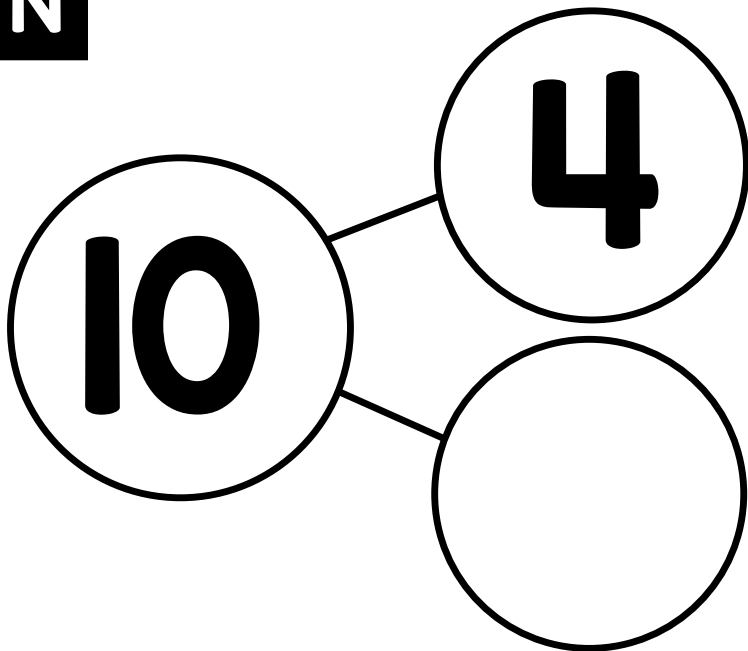
M



$$\square - \square = \square$$

Center 24 Unit 3

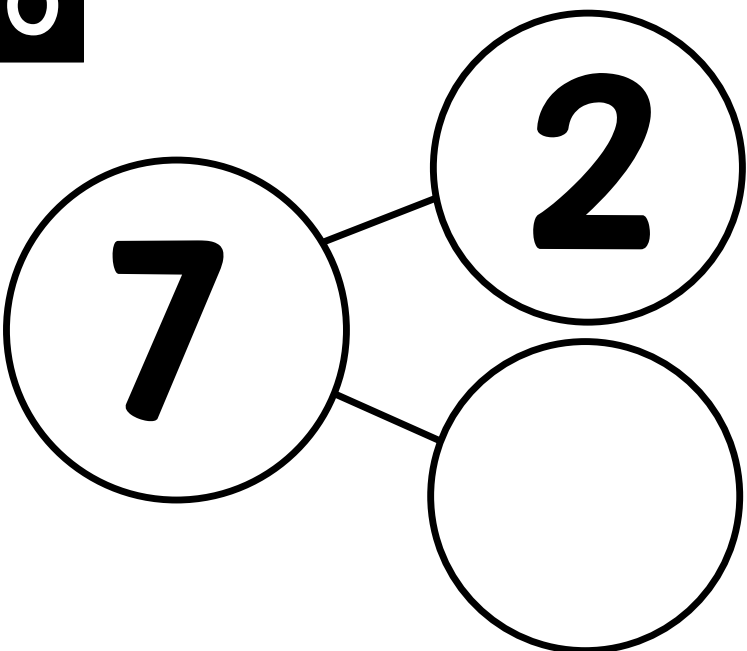
N



$$\square - \square = \square$$

Center 24 Unit 3

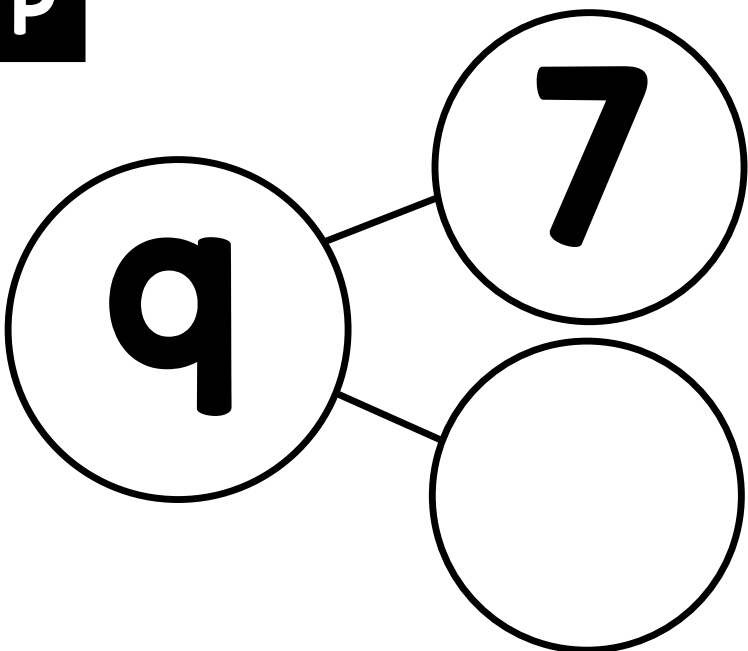
O



$$\square - \square = \square$$

Center 24 Unit 3

P



$$\square - \square = \square$$

Center 24 Unit 3

© Annie Moffatt @ The Moffatt Girls 2018

Name: _____

Recording Sheet

Number Bonds to 10

Directions: Subtract the part from the whole to find the missing number. Write a number sentence for each number bond.

A

$$\underline{\quad} - \underline{\quad} = \underline{\quad}$$

I

$$\underline{\quad} - \underline{\quad} = \underline{\quad}$$

B

$$\underline{\quad} - \underline{\quad} = \underline{\quad}$$

J

$$\underline{\quad} - \underline{\quad} = \underline{\quad}$$

C

$$\underline{\quad} - \underline{\quad} = \underline{\quad}$$

K

$$\underline{\quad} - \underline{\quad} = \underline{\quad}$$

D

$$\underline{\quad} - \underline{\quad} = \underline{\quad}$$

L

$$\underline{\quad} - \underline{\quad} = \underline{\quad}$$

E

$$\underline{\quad} - \underline{\quad} = \underline{\quad}$$

M

$$\underline{\quad} - \underline{\quad} = \underline{\quad}$$

F

$$\underline{\quad} - \underline{\quad} = \underline{\quad}$$

N

$$\underline{\quad} - \underline{\quad} = \underline{\quad}$$

G

$$\underline{\quad} - \underline{\quad} = \underline{\quad}$$

O

$$\underline{\quad} - \underline{\quad} = \underline{\quad}$$

H

$$\underline{\quad} - \underline{\quad} = \underline{\quad}$$

P

$$\underline{\quad} - \underline{\quad} = \underline{\quad}$$