


Center 12

# Fact Family POPcorn!

Use the numbers on the popcorn tub to make two addition and two subtraction equations.



Name: \_\_\_\_\_

**Recording Sheet**

**Fact Family POPcorn!**

Directions: Use the numbers on the popcorn tub to make two addition and two subtraction problems. Record your answers here. Write the letter of the popcorn box in the upper left hand corner.


<b>A</b> $9 + 5 = 14$	$\underline{\quad} + \underline{\quad} = \underline{\quad}$
$5 + 9 = 14$	$\underline{\quad} + \underline{\quad} = \underline{\quad}$
$14 - 5 = 9$	$\underline{\quad} - \underline{\quad} = \underline{\quad}$
$14 - 9 = 5$	$\underline{\quad} - \underline{\quad} = \underline{\quad}$
$\underline{\quad} + \underline{\quad} = \underline{\quad}$	$\underline{\quad} + \underline{\quad} = \underline{\quad}$
$\underline{\quad} + \underline{\quad} = \underline{\quad}$	$\underline{\quad} + \underline{\quad} = \underline{\quad}$
$\underline{\quad} - \underline{\quad} = \underline{\quad}$	$\underline{\quad} - \underline{\quad} = \underline{\quad}$
$\underline{\quad} - \underline{\quad} = \underline{\quad}$	$\underline{\quad} - \underline{\quad} = \underline{\quad}$
$\underline{\quad} + \underline{\quad} = \underline{\quad}$	$\underline{\quad} + \underline{\quad} = \underline{\quad}$
$\underline{\quad} + \underline{\quad} = \underline{\quad}$	$\underline{\quad} + \underline{\quad} = \underline{\quad}$
$\underline{\quad} - \underline{\quad} = \underline{\quad}$	$\underline{\quad} - \underline{\quad} = \underline{\quad}$
$\underline{\quad} - \underline{\quad} = \underline{\quad}$	$\underline{\quad} - \underline{\quad} = \underline{\quad}$

**A**

Center 12 Unit 3

**B**


Center 12 Unit 3

**C**


Center 12 Unit 3

**D**

Center 12 Unit 3




E



F




G




H



I




J



K



L



Name: \_\_\_\_\_

# Recording Sheet

## Fact Family POPcorn!

Directions: Use the numbers on the popcorn tub to make two addition and two subtraction problems. Record your answers here. Write the letter of the popcorn box in the upper left hand corner.

<div data-bbox="53 455 808 982"><p>_____ + _____ = _____</p><p>_____ + _____ = _____</p><p>_____ - _____ = _____</p><p>_____ - _____ = _____</p></div>	<div data-bbox="808 455 1583 982"><p>_____ + _____ = _____</p><p>_____ + _____ = _____</p><p>_____ - _____ = _____</p><p>_____ - _____ = _____</p></div>
<div data-bbox="53 982 808 1509"><p>_____ + _____ = _____</p><p>_____ + _____ = _____</p><p>_____ - _____ = _____</p><p>_____ - _____ = _____</p></div>	<div data-bbox="808 982 1583 1509"><p>_____ + _____ = _____</p><p>_____ + _____ = _____</p><p>_____ - _____ = _____</p><p>_____ - _____ = _____</p></div>
<div data-bbox="53 1509 808 2030"><p>_____ + _____ = _____</p><p>_____ + _____ = _____</p><p>_____ - _____ = _____</p><p>_____ - _____ = _____</p></div>	<div data-bbox="808 1509 1583 2030"><p>_____ + _____ = _____</p><p>_____ + _____ = _____</p><p>_____ - _____ = _____</p><p>_____ - _____ = _____</p></div>