


Center 28

Domino Facts

Choose a domino from the pile. Draw the dots on the recording sheet. Write a fact family for the domino.



Name: _____


Recording Sheet

Fact Family Dominos


Directions: Choose a domino from the pile. Draw the dots. Write a fact family for each domino you select.

	$6 + 3 = 9$ $3 + 6 = 9$ $9 - 3 = 6$ $9 - 6 = 3$	<input type="text"/> _____ <input type="text"/> _____
<input type="text"/> _____	_____	<input type="text"/> _____ <input type="text"/> _____
<input type="text"/> _____	_____	<input type="text"/> _____ <input type="text"/> _____


Center 28 Unit 2




Center 28 Unit 2




Center 28 Unit 2




Center 28 Unit 2




Center 28 Unit 2




Center 28 Unit 2




Center 28 Unit 2




Center 28 Unit 2




Center 28 Unit 2




Center 28 Unit 2




Center 28 Unit 2




Center 28 Unit 2




Center 28 Unit 2




Center 28 Unit 2




Center 28 Unit 2




Center 28 Unit 2



Center 28 Unit 2



Center 28 Unit 2




Name: _____


Recording Sheet

Fact Family Dominos


Directions: Choose a domino from the pile. Draw the dots.
Write a fact family for each domino you select.




$$\begin{array}{l} \underline{\quad} + \underline{\quad} = \underline{\quad} \\ \underline{\quad} + \underline{\quad} = \underline{\quad} \\ \underline{\quad} - \underline{\quad} = \underline{\quad} \\ \underline{\quad} - \underline{\quad} = \underline{\quad} \end{array}$$




$$\begin{array}{l} \underline{\quad} + \underline{\quad} = \underline{\quad} \\ \underline{\quad} + \underline{\quad} = \underline{\quad} \\ \underline{\quad} - \underline{\quad} = \underline{\quad} \\ \underline{\quad} - \underline{\quad} = \underline{\quad} \end{array}$$



$$\begin{array}{l} \underline{\quad} + \underline{\quad} = \underline{\quad} \\ \underline{\quad} + \underline{\quad} = \underline{\quad} \\ \underline{\quad} - \underline{\quad} = \underline{\quad} \\ \underline{\quad} - \underline{\quad} = \underline{\quad} \end{array}$$



$$\begin{array}{l} \underline{\quad} + \underline{\quad} = \underline{\quad} \\ \underline{\quad} + \underline{\quad} = \underline{\quad} \\ \underline{\quad} - \underline{\quad} = \underline{\quad} \\ \underline{\quad} - \underline{\quad} = \underline{\quad} \end{array}$$



$$\begin{array}{l} \underline{\quad} + \underline{\quad} = \underline{\quad} \\ \underline{\quad} + \underline{\quad} = \underline{\quad} \\ \underline{\quad} - \underline{\quad} = \underline{\quad} \\ \underline{\quad} - \underline{\quad} = \underline{\quad} \end{array}$$



$$\begin{array}{l} \underline{\quad} + \underline{\quad} = \underline{\quad} \\ \underline{\quad} + \underline{\quad} = \underline{\quad} \\ \underline{\quad} - \underline{\quad} = \underline{\quad} \\ \underline{\quad} - \underline{\quad} = \underline{\quad} \end{array}$$