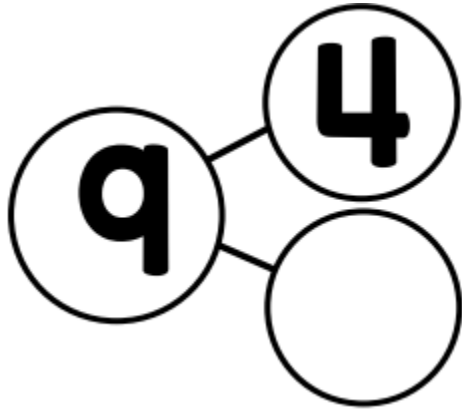


Name _____

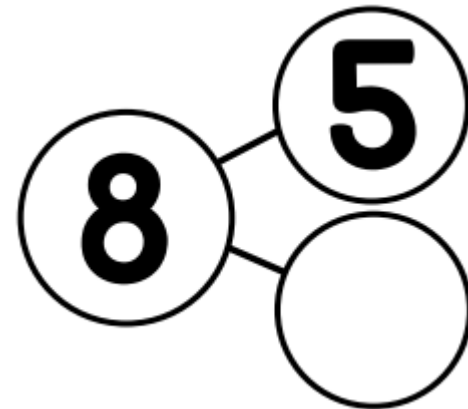
Date _____

Write an addition AND subtraction number sentence for each number bond.



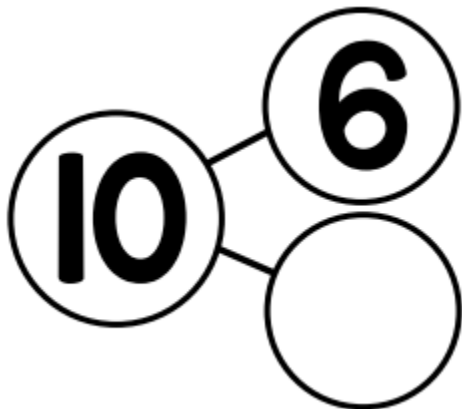
$$\underline{\quad} = \underline{\quad} + \underline{\quad}$$

$$\underline{\quad} - \underline{\quad} = \underline{\quad}$$



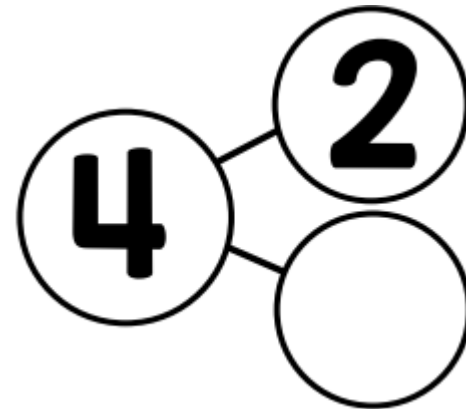
$$\underline{\quad} = \underline{\quad} + \underline{\quad}$$

$$\underline{\quad} - \underline{\quad} = \underline{\quad}$$



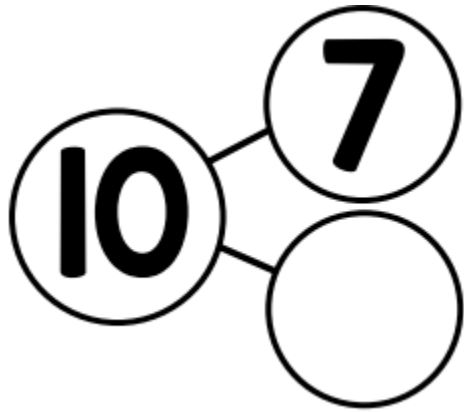
$$\underline{\quad} = \underline{\quad} + \underline{\quad}$$

$$\underline{\quad} - \underline{\quad} = \underline{\quad}$$



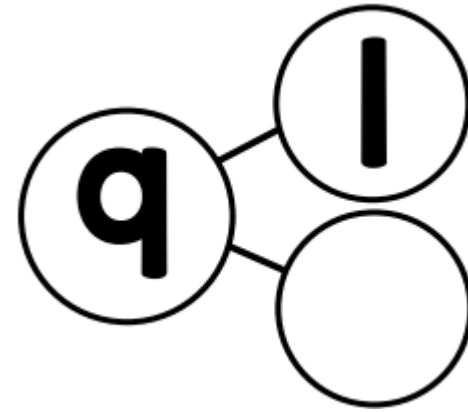
$$\underline{\quad} = \underline{\quad} + \underline{\quad}$$

$$\underline{\quad} - \underline{\quad} = \underline{\quad}$$



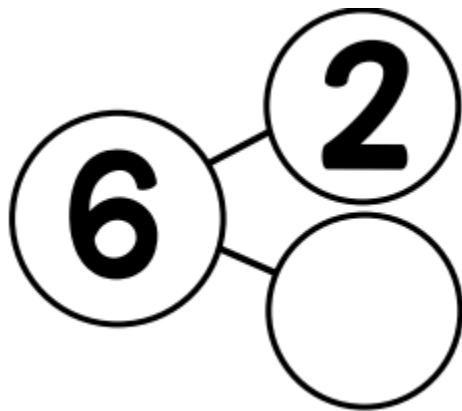
$$\underline{\quad} = \underline{\quad} \bigcirc \underline{\quad}$$

$$\underline{\quad} \bigcirc \underline{\quad} = \underline{\quad}$$



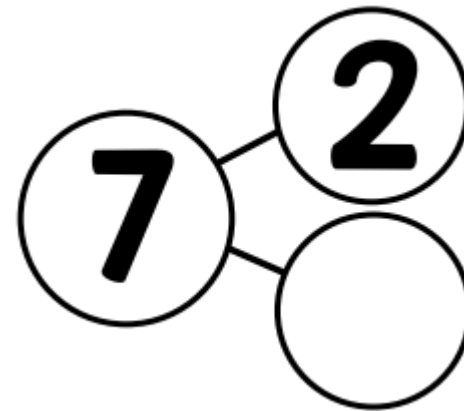
$$\underline{\quad} = \underline{\quad} \bigcirc \underline{\quad}$$

$$\underline{\quad} \bigcirc \underline{\quad} = \underline{\quad}$$



$$\underline{\quad} = \underline{\quad} \bigcirc \underline{\quad}$$

$$\underline{\quad} \bigcirc \underline{\quad} = \underline{\quad}$$



$$\underline{\quad} = \underline{\quad} \bigcirc \underline{\quad}$$

$$\underline{\quad} \bigcirc \underline{\quad} = \underline{\quad}$$